



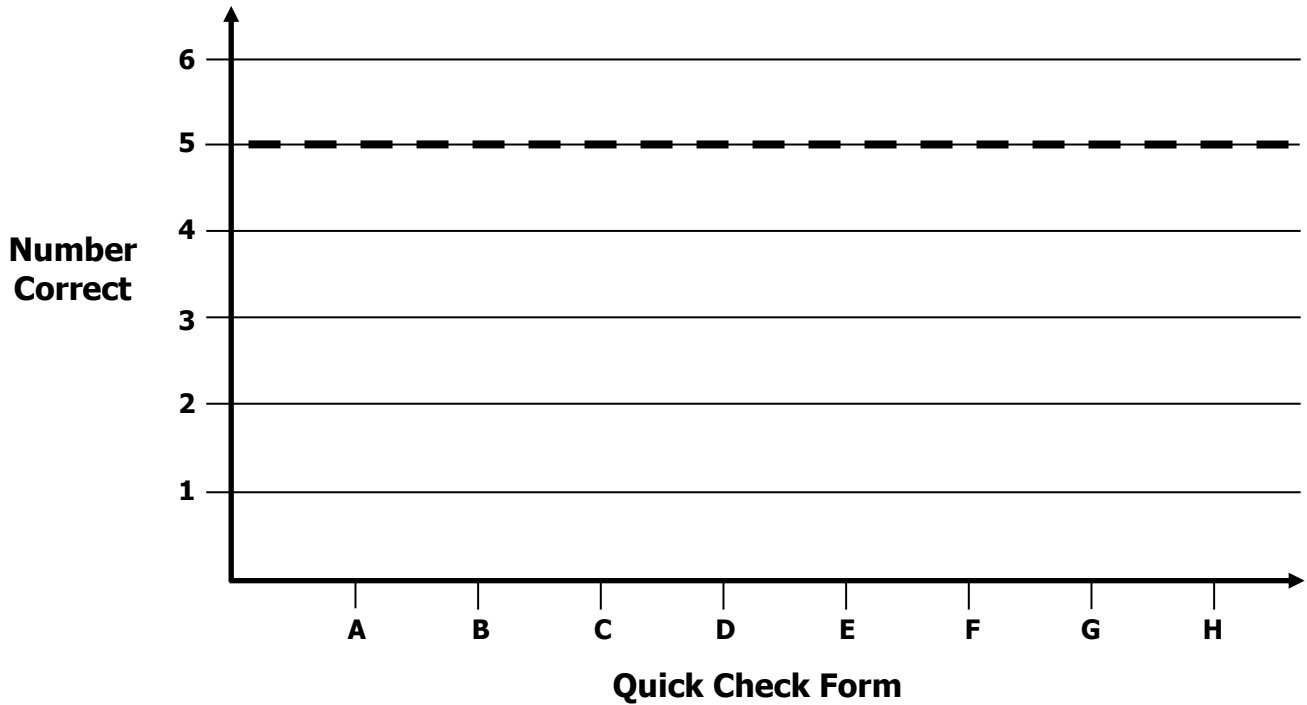
# Growth Chart

3<sup>rd</sup> Grade - Readiness Standard 1 - 2.NBT.3

Name \_\_\_\_\_ Date \_\_\_\_\_

**Learning Target:** I will identify numbers to 1,000.

**Goal:** 5 out of 6 correct



Intervention	Date	Score
Session 1:		
Session 2:		
Session 3:		
Session 4:		
Session 5:		
Session 6:		
Session 7:		
Session 8:		

# Quick Check - Form A

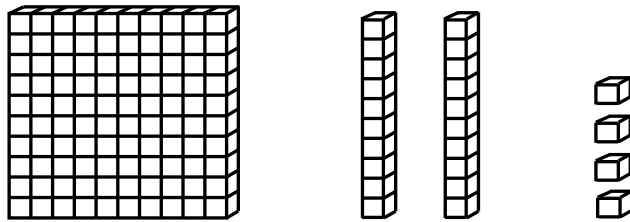
3<sup>rd</sup> Grade - Readiness Standard 1 - 2.NBT.3

Name \_\_\_\_\_ Date \_\_\_\_\_

**Learning Target:** I will identify numbers to 1,000.

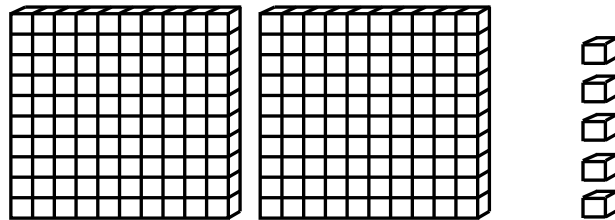
**Directions:** Write each number shown by the base ten blocks. (Work time: 3 minutes)

1.



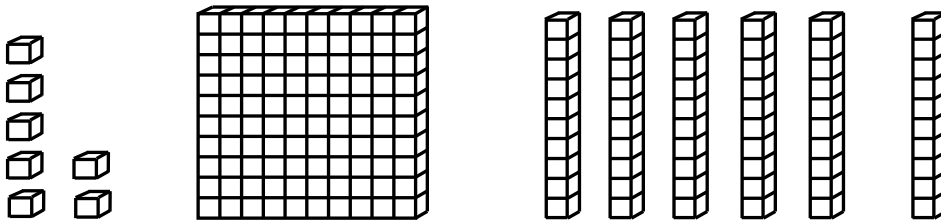
\_\_\_\_\_

2.



\_\_\_\_\_

3.

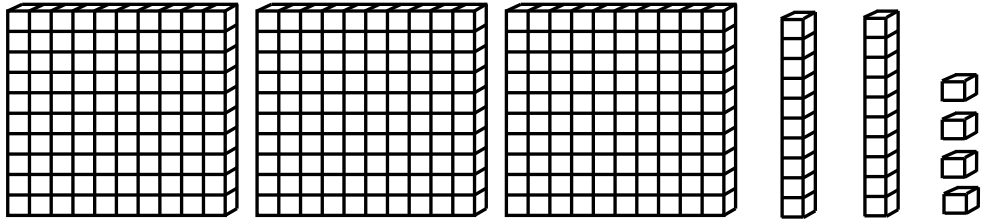


\_\_\_\_\_

# Quick Check - Form A

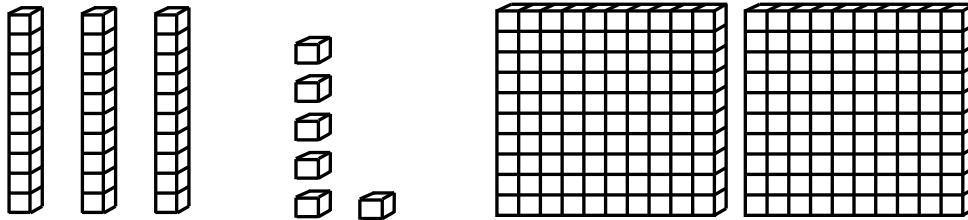
3<sup>rd</sup> Grade - Readiness Standard 1 - 2.NBT.3

4.



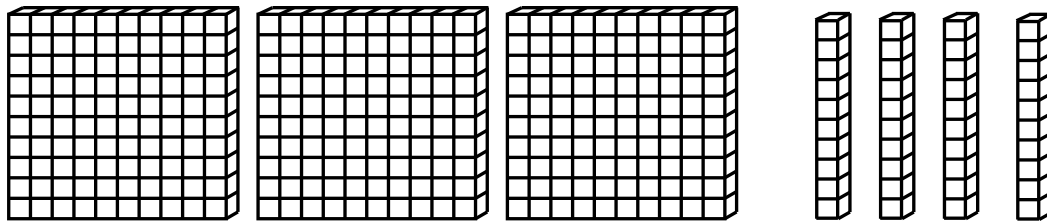
\_\_\_\_\_

5.



\_\_\_\_\_

6.



\_\_\_\_\_

# Quick Check - Form B

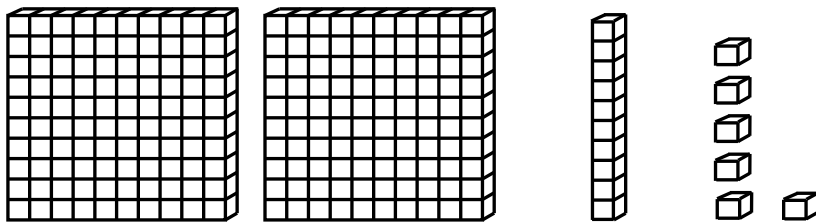
3<sup>rd</sup> Grade - Readiness Standard 1 - 2.NBT.3

Name \_\_\_\_\_ Date \_\_\_\_\_

**Learning Target:** I will identify numbers to 1,000.

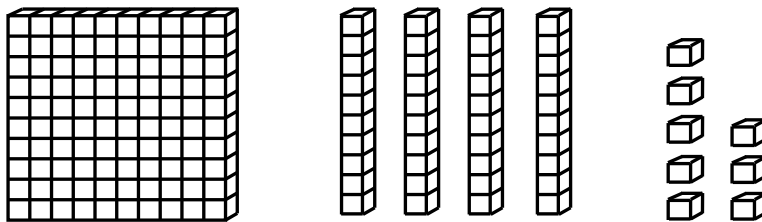
**Directions:** Write each number shown by the base ten blocks. (Work time: 3 minutes)

1.



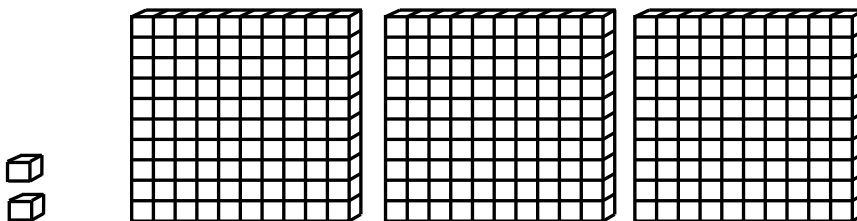
\_\_\_\_\_

2.



\_\_\_\_\_

3.

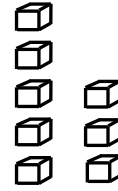

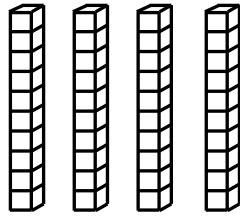
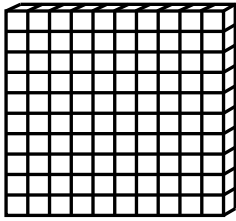


\_\_\_\_\_

# Quick Check - Form B

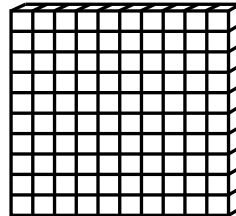

3<sup>rd</sup> Grade - Readiness Standard 1 - 2.NBT.3

4.



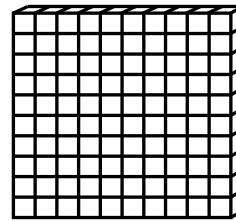
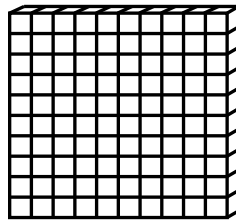

\_\_\_\_\_

5.



\_\_\_\_\_

6.



\_\_\_\_\_

# Quick Check - Form C


3<sup>rd</sup> Grade - Readiness Standard 1 - 2.NBT.3

Name \_\_\_\_\_ Date \_\_\_\_\_

**Learning Target:** I will identify numbers to 1,000.

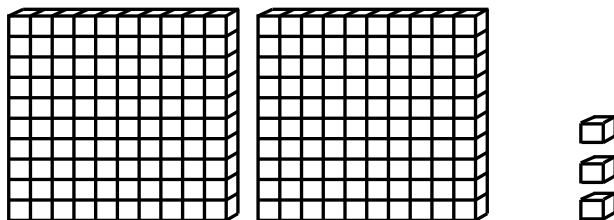
**Directions:** Write each number shown by the base ten blocks. (Work time: 3 minutes)

1.



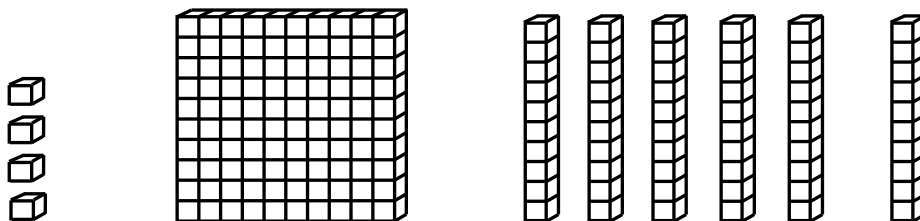
\_\_\_\_\_

2.



\_\_\_\_\_

3.

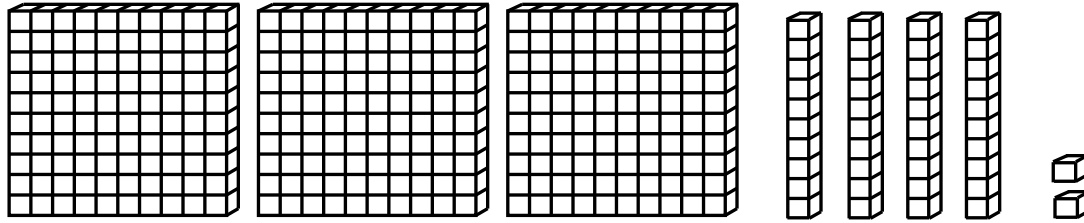


\_\_\_\_\_

# Quick Check - Form C

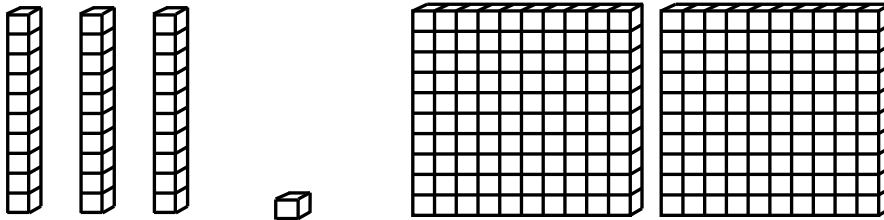
3<sup>rd</sup> Grade - Readiness Standard 1 - 2.NBT.3

4.



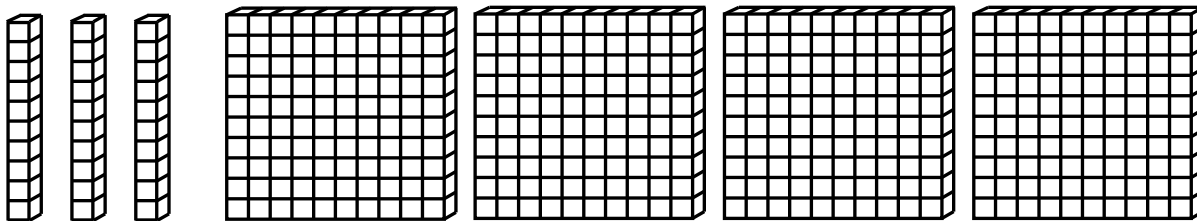
\_\_\_\_\_

5.



\_\_\_\_\_

6.



\_\_\_\_\_

# Quick Check - Form D

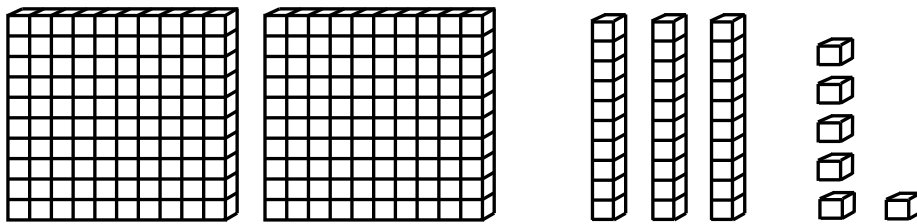
3<sup>rd</sup> Grade - Readiness Standard 1 - 2.NBT.3

Name \_\_\_\_\_ Date \_\_\_\_\_

**Learning Target:** I will identify numbers to 1,000.

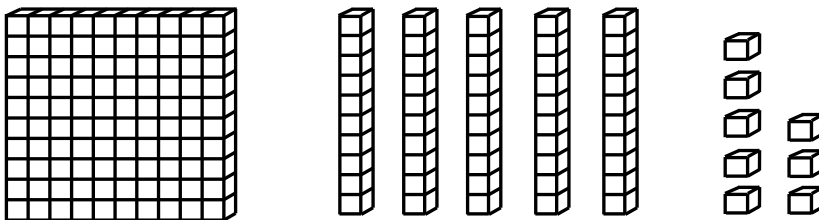
**Directions:** Write each number shown by the base ten blocks. (Work time: 3 minutes)

1.



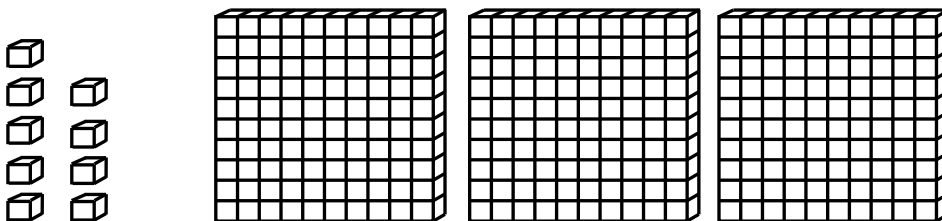
\_\_\_\_\_

2.



\_\_\_\_\_

3.



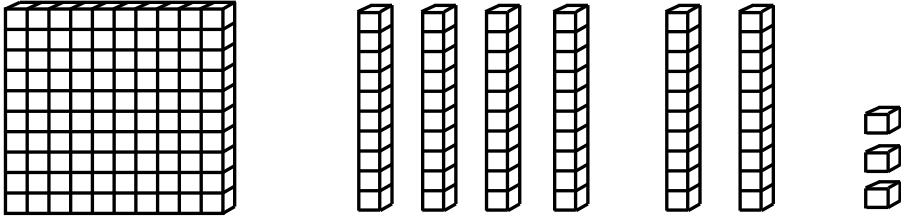
\_\_\_\_\_



# Quick Check - Form D

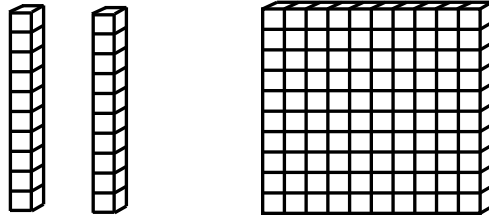
3<sup>rd</sup> Grade - Readiness Standard 1 - 2.NBT.3

4.



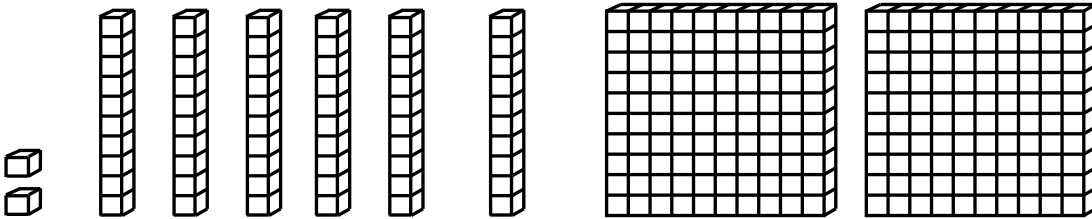
\_\_\_\_\_

5.



\_\_\_\_\_

6.



\_\_\_\_\_

# Quick Check - Form E

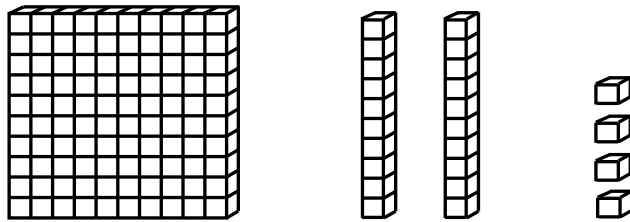
3<sup>rd</sup> Grade - Readiness Standard 1 - 2.NBT.3

Name \_\_\_\_\_ Date \_\_\_\_\_

**Learning Target:** I will identify numbers to 1,000.

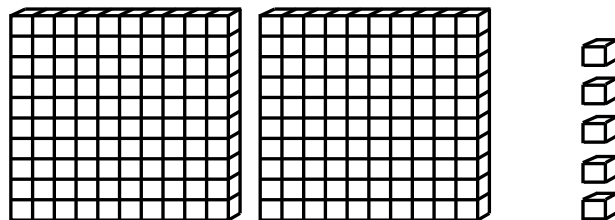
**Directions:** Write each number shown by the base ten blocks. (Work time: 3 minutes)

1.



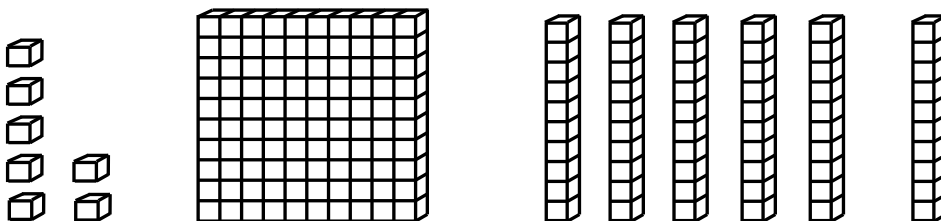
\_\_\_\_\_

2.



\_\_\_\_\_

3.

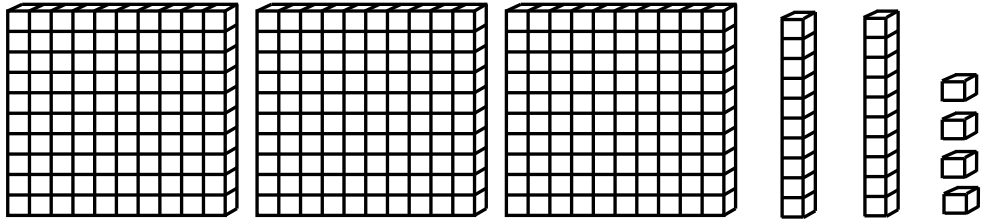


\_\_\_\_\_

# Quick Check - Form E

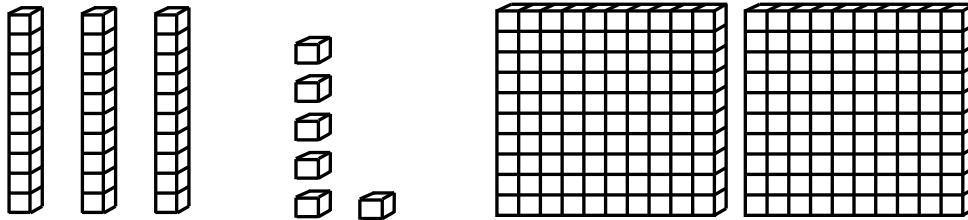
3<sup>rd</sup> Grade - Readiness Standard 1 - 2.NBT.3

4.



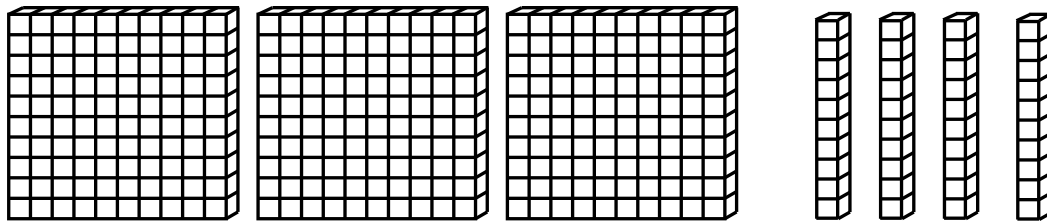
\_\_\_\_\_

5.



\_\_\_\_\_

6.



\_\_\_\_\_

# Quick Check - Form F

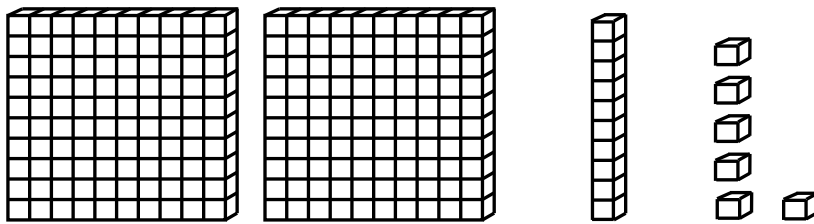
3<sup>rd</sup> Grade - Readiness Standard 1 - 2.NBT.3

Name \_\_\_\_\_ Date \_\_\_\_\_

**Learning Target:** I will identify numbers to 1,000.

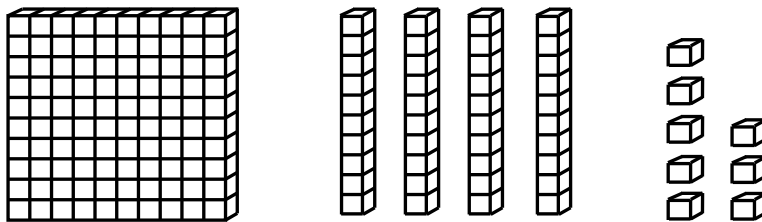
**Directions:** Write each number shown by the base ten blocks. (Work time: 3 minutes)

1.



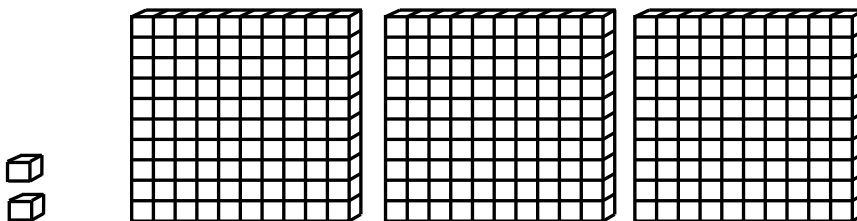
\_\_\_\_\_

2.



\_\_\_\_\_

3.

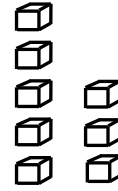

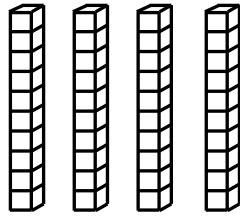
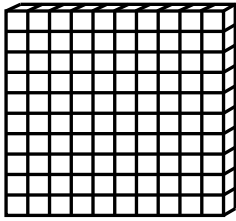


\_\_\_\_\_

# Quick Check - Form F

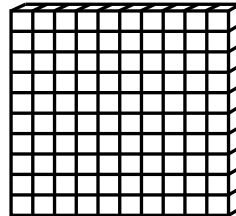

3<sup>rd</sup> Grade - Readiness Standard 1 - 2.NBT.3

4.



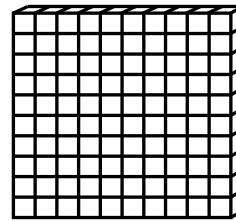
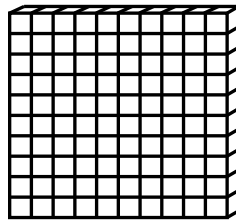

\_\_\_\_\_

5.



\_\_\_\_\_

6.



\_\_\_\_\_

# Quick Check - Form G

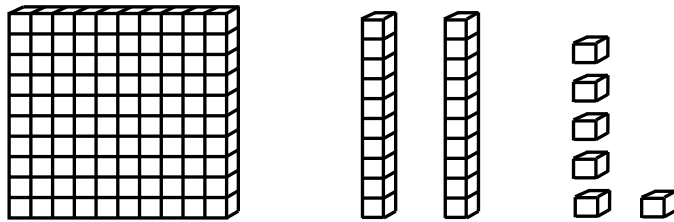
3<sup>rd</sup> Grade - Readiness Standard 1 - 2.NBT.3

Name \_\_\_\_\_ Date \_\_\_\_\_

**Learning Target:** I will identify numbers to 1,000.

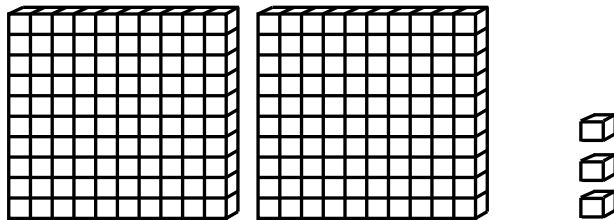
**Directions:** Write each number shown by the base ten blocks. (Work time: 3 minutes)

1.



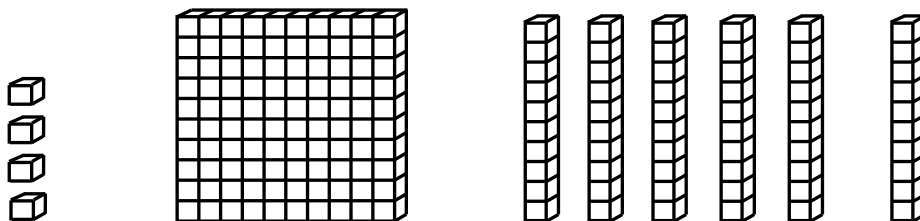
\_\_\_\_\_

2.



\_\_\_\_\_

3.

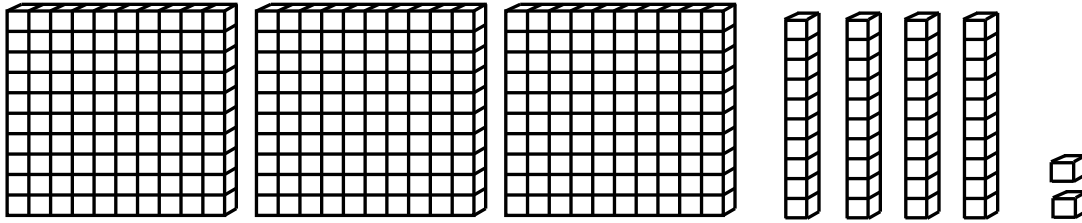


\_\_\_\_\_

# Quick Check - Form G

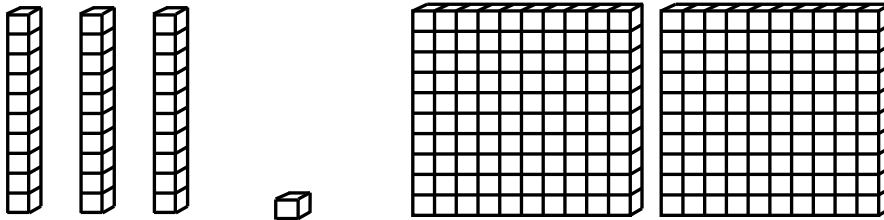
3<sup>rd</sup> Grade - Readiness Standard 1 - 2.NBT.3

4.



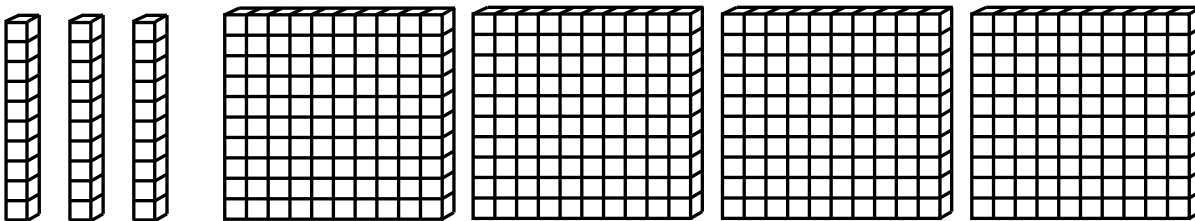
\_\_\_\_\_

5.



\_\_\_\_\_

6.



\_\_\_\_\_

# Quick Check - Form H

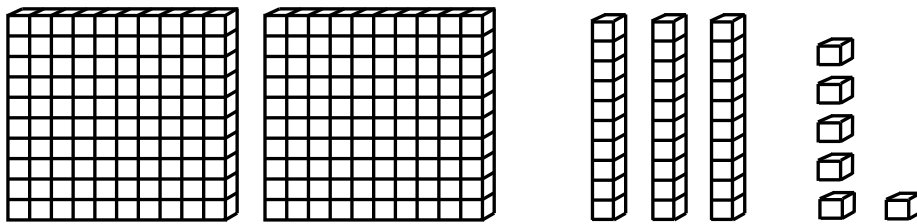
3<sup>rd</sup> Grade - Readiness Standard 1 - 2.NBT.3

Name \_\_\_\_\_ Date \_\_\_\_\_

**Learning Target:** I will identify numbers to 1,000.

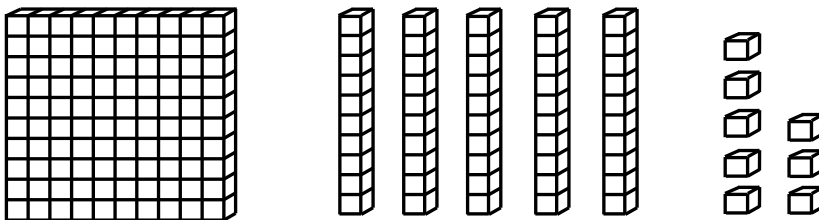
**Directions:** Write each number shown by the base ten blocks. (Work time: 3 minutes)

1.



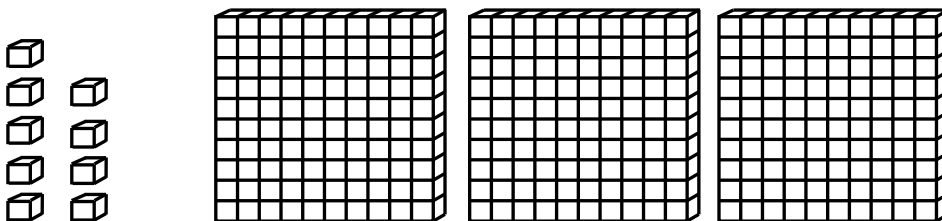
\_\_\_\_\_

2.



\_\_\_\_\_

3.



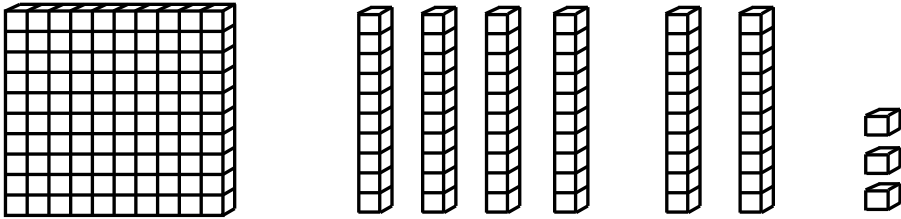
\_\_\_\_\_



# Quick Check - Form H

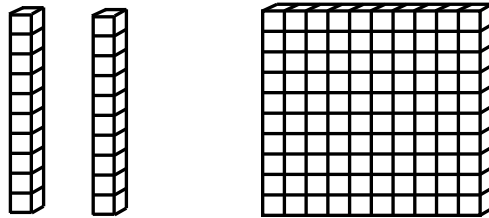
3<sup>rd</sup> Grade - Readiness Standard 1 - 2.NBT.3

4.



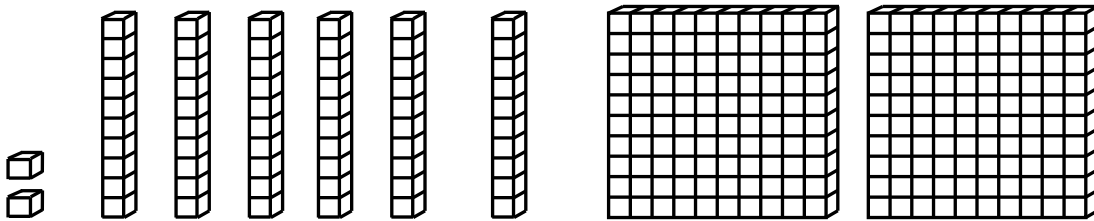
\_\_\_\_\_

5.



\_\_\_\_\_

6.



\_\_\_\_\_