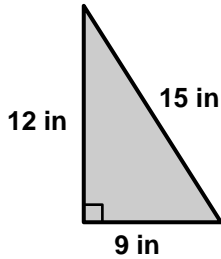


7th Grade Geometry: Fall Progress

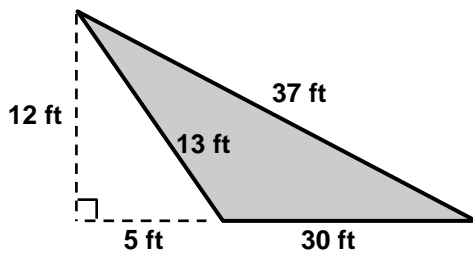
Questions 1-3: Select the correct number and label for each question.

1. Find the area of the triangle. (Note: The figure is not drawn to scale.)



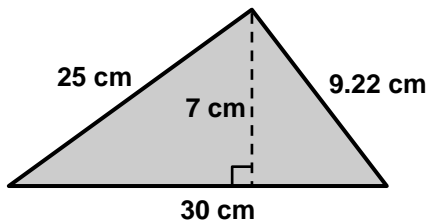
- | | | | |
|---------------------------|---------------------------------------|---------------------------------------|--------------------------|
| <input type="radio"/> 108 | <input type="radio"/> 36 | <input type="radio"/> 67.5 | <input type="radio"/> 54 |
| <input type="radio"/> in | <input type="radio"/> in ³ | <input type="radio"/> in ² | |

2. Find the area of the shaded triangle. (Note: The figure is not drawn to scale.)



- | | | | |
|---------------------------------------|---------------------------------------|---------------------------|--------------------------|
| <input type="radio"/> 195 | <input type="radio"/> 180 | <input type="radio"/> 210 | <input type="radio"/> 80 |
| <input type="radio"/> ft ³ | <input type="radio"/> ft ² | <input type="radio"/> ft | |

3. Find the area of the shaded triangle. (Note: The figure is not drawn to scale.)



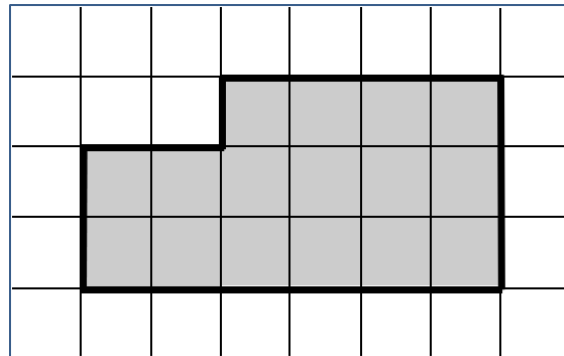
- | | | | |
|---------------------------------------|-----------------------------|---------------------------------------|-----------------------------|
| <input type="radio"/> 210 | <input type="radio"/> 138.3 | <input type="radio"/> 105 | <input type="radio"/> 64.22 |
| <input type="radio"/> cm ² | <input type="radio"/> cm | <input type="radio"/> cm ³ | |



Please stop, put your pencil down and wait for the next directions.

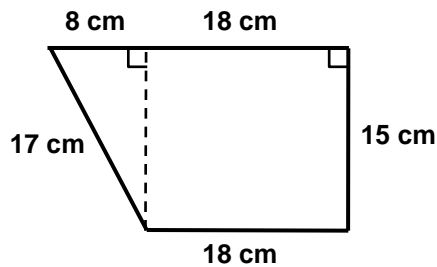
Questions 4-6: Select the correct number and label for each question.

4. Find the area of the shaded polygon.



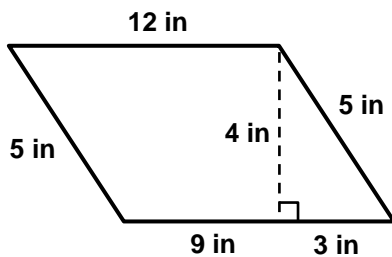
- 18 16 22 12
 Units Squared Units Cubed Units

5. Find the area of the trapezoid. *(Note: The figure is not drawn to scale.)*



- 270 390 374 330
 cm² cm cm³

6. Find the area of the parallelogram. *(Note: The figure is not drawn to scale.)*




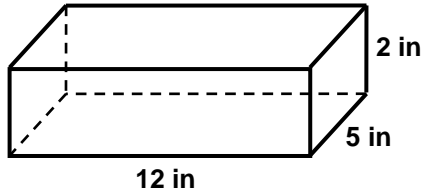
- 48 60 24 30
 in in² in³



Please stop, put your pencil down and wait for the next directions.

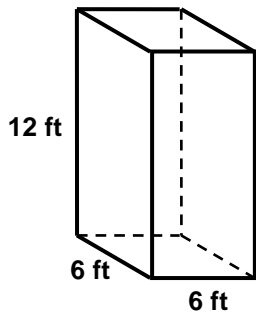
Questions 7-9: Select the correct number and label for each question.

- 7.** What is the maximum number of 1-inch cubes  that can fit inside the right prism?
(Note: The figure is not drawn to scale.)



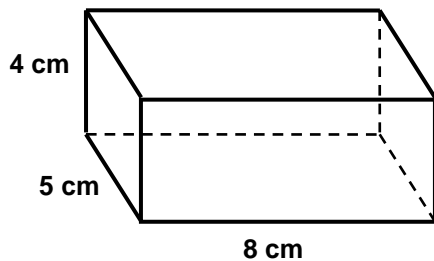
- 188 cubes
 120 cubes
 168 cubes
 68 cubes

- 8.** Find the volume of the right prism. *(Note: The figure is not drawn to scale.)*



- 432
 360
 216
 288
 ft³
 ft²
 ft

- 9.** Find the volume of the right prism. *(Note: The figure is not drawn to scale.)*



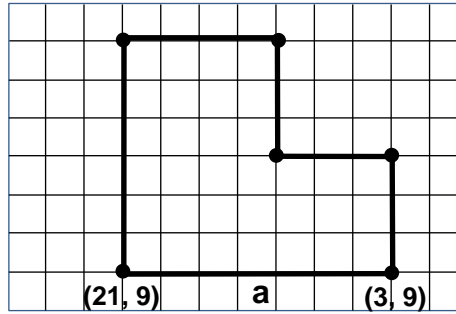
- 104
 144
 160
 184
 cm²
 cm
 cm³



Please stop, put your pencil down and wait for the next directions.

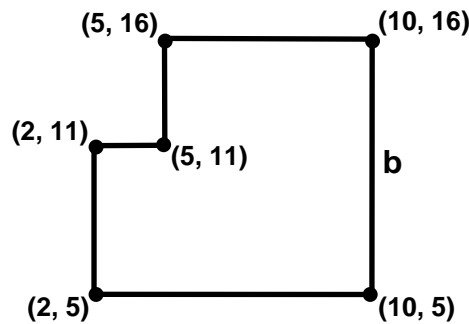
Questions 10-12: Select the correct answer for each question.

10. Find the length of side a.



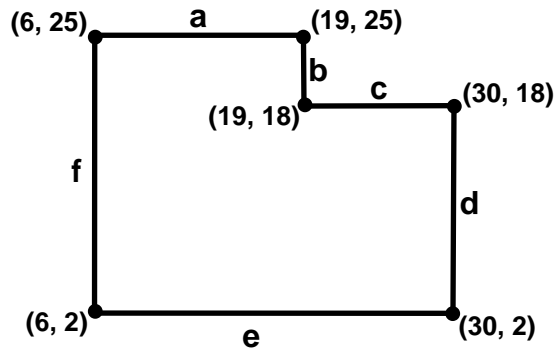
- 6
 18
 21
 24

11. Find the length of side b.



- 5
 16
 21
 11

12. Find the length of side c.



- 12
 11
 18
 7



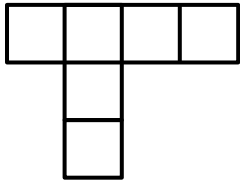
Please stop, put your pencil down and wait for the next directions.

Questions 13-15: Select the correct answer for each question.

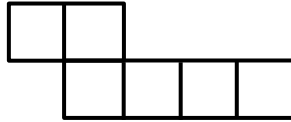
13. Which pattern could be folded to form a cube?



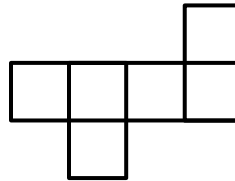
Pattern A



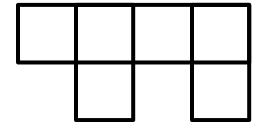
Pattern B



Pattern C



Pattern D



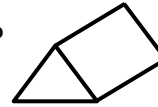
A

B

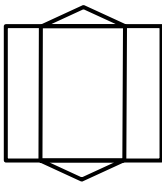
C

D

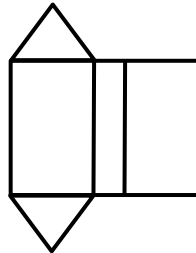
14. Which patterns could be folded to form a right triangular prism?



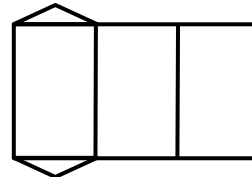
Pattern A



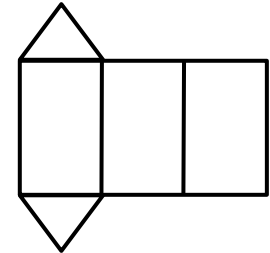
Pattern B



Pattern C



Pattern D




Pattern A

Pattern B

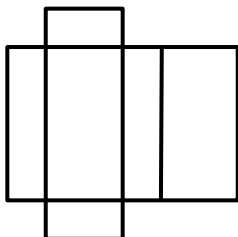
Pattern C

Pattern D

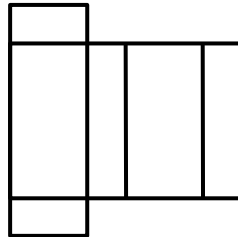
15. Which pattern could not be folded to form a right rectangular prism?



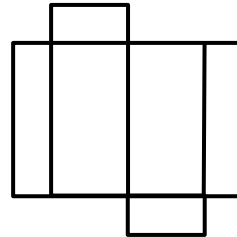
Pattern A



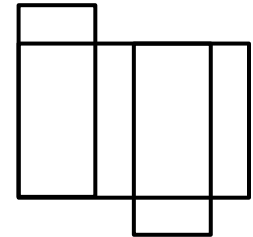
Pattern B



Pattern C



Pattern D



Pattern A

Pattern B

Pattern C

Pattern D



Please stop, put your pencil down and wait for the next directions.